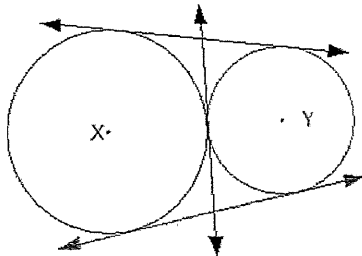
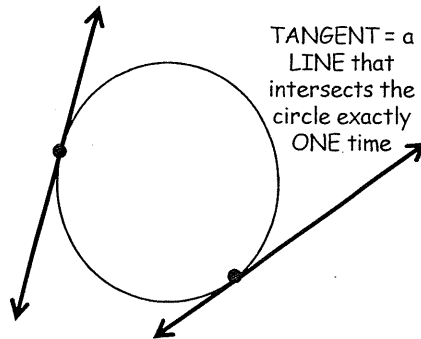


Ch. 6.1

PROPERTIES OF TANGENTS

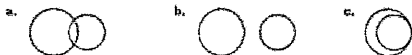


TANGENT = a
LINE that
intersects the
circle exactly
ONE time



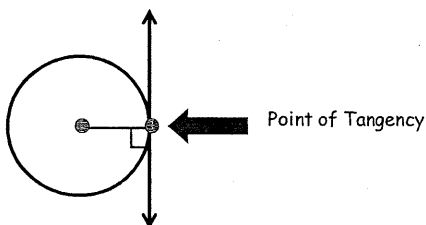
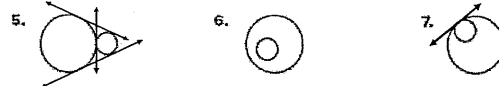
Common Tangents

Tell how many common tangents the circles have and draw them.



YOUR TURN

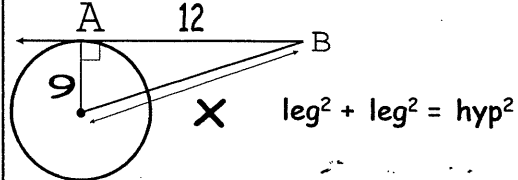
Tell how many common tangents the circles have and draw them.



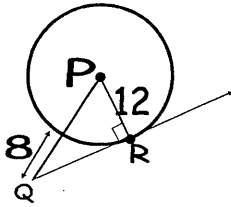
If a line is tangent to a circle, then it is perpendicular to the radius drawn to the point of tangency

More Pythagorean Theorem type problems!
Yeah!! ☺

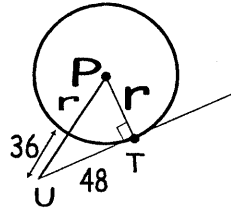
1. Find x



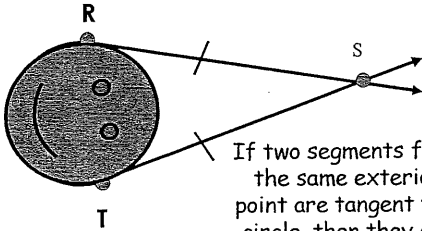
2. Find RQ



YOUR TURN!!!
Find PT



$$RS \cong TS$$

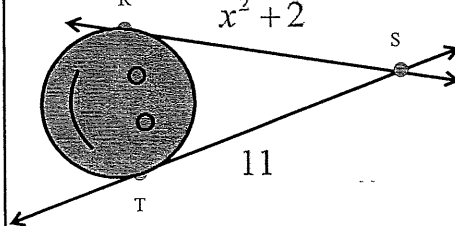


If two segments from the same exterior point are tangent to a circle, then they are congruent.



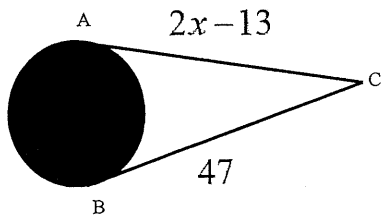
Party hat problems!

3. Find x



$$x =$$

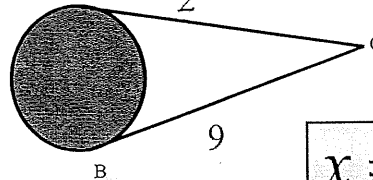
4. Find x



$$x =$$

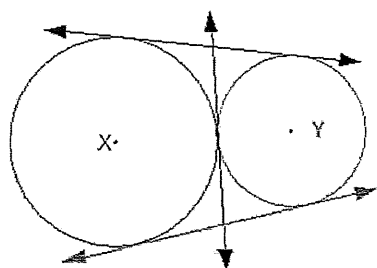
YOUR TURN

Find x

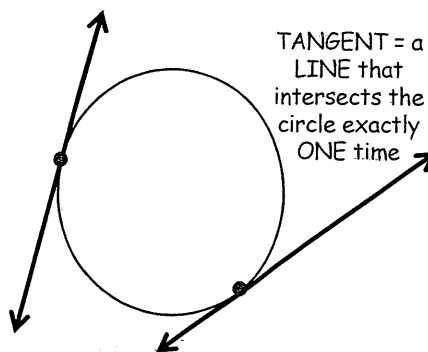


$$x =$$

PROPERTIES OF TANGENTS

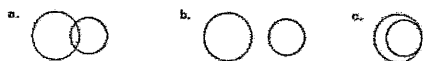


TANGENT = a
LINE that
intersects the
circle exactly
ONE time



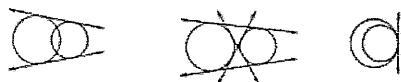
Common Tangents

Tell how many common tangents the circles have and draw them.



Solution

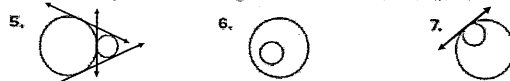
a. 2 common tangents b. 4 common tangents c. 1 common tangent



<http://www.ies.co.jp/math/java/geo/comtan/comtan.html>

YOUR TURN

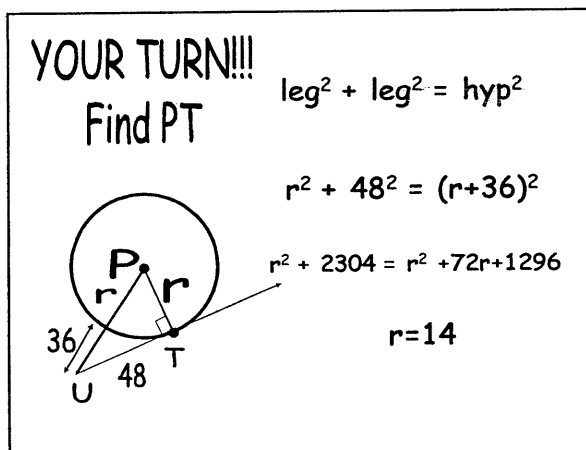
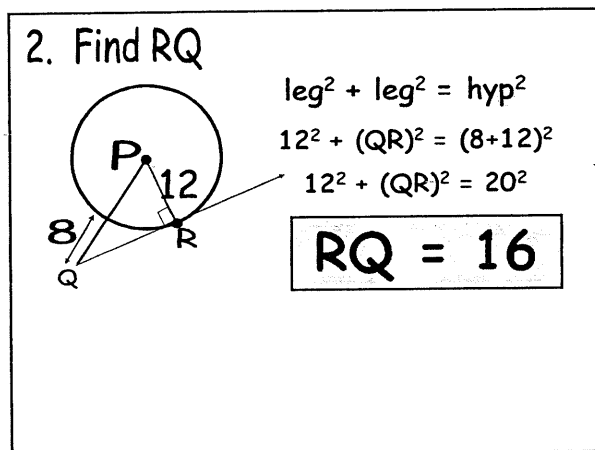
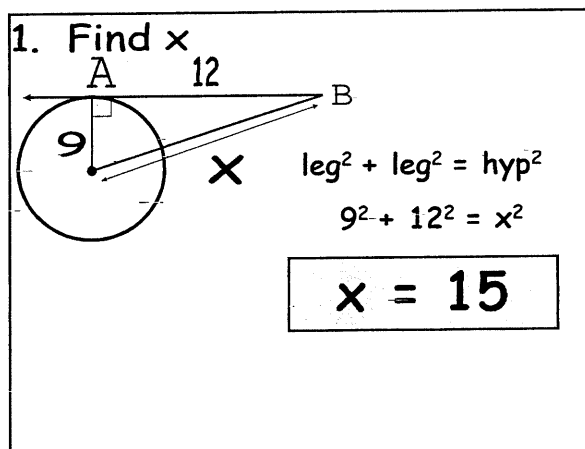
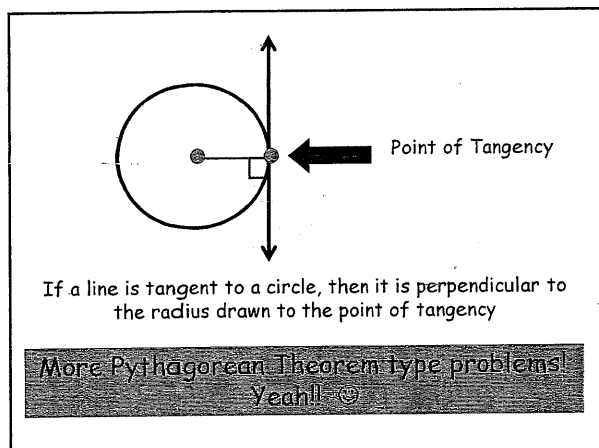
Tell how many common tangents the circles have and draw them.



3 common tangents

0 common tangents

1 common tangent



$RS \cong TS$

If two segments from the same exterior point are tangent to a circle, then they are congruent.

Party hat problems!

3. Find x

$x^2 + 2 = 11$
 $x^2 = 9$
 $x = 3$

4. Find x

$x = 30$

YOUR TURN

Find x

$x = 28$

CCGPS Analytic Geometry

Homework
Page 188 #s 1-8
#s20 - 26