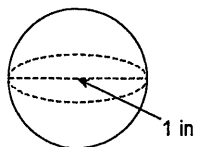


12-6 Volume of Spheres

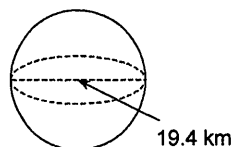
$$V = \frac{4}{3}\pi r^3$$

Find the volume of each figure. Round your answers to the nearest hundredth, if necessary. Leave your answers in terms of π for answers that contain π .

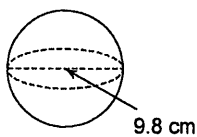
1)



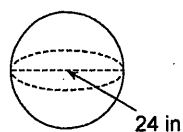
2)



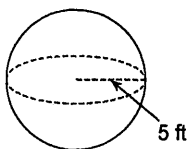
3)



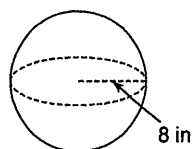
4)



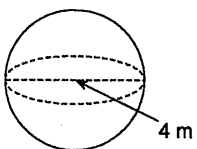
5)



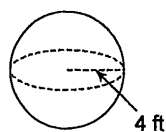
6)



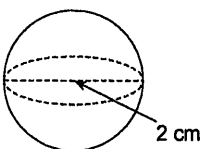
7)



8)



9)



10)

